

























**A Listen and circle.**




/ 6

<p>1.</p> <div style="display: flex; justify-content: space-around;"> <div style="text-align: center;">  (A)         </div> <div style="text-align: center;">  (B)         </div> </div> <div style="display: flex; justify-content: space-around; margin-top: 20px;"> <div style="text-align: center;">  (C)         </div> <div style="text-align: center;">  (D)         </div> </div>	<p>2.</p> <div style="display: flex; justify-content: space-around;"> <div style="text-align: center;">  (A)         </div> <div style="text-align: center;">  (B)         </div> </div> <div style="display: flex; justify-content: space-around; margin-top: 20px;"> <div style="text-align: center;">  (C)         </div> <div style="text-align: center;">  (D)         </div> </div>	<p>3.</p> <div style="display: flex; justify-content: space-around;"> <div style="text-align: center;">  (A)         </div> <div style="text-align: center;">  (B)         </div> </div> <div style="display: flex; justify-content: space-around; margin-top: 20px;"> <div style="text-align: center;">  (C)         </div> <div style="text-align: center;">  (D)         </div> </div>
<p>4.</p> <div style="display: flex; justify-content: space-around;"> <div style="text-align: center;">  (A)         </div> <div style="text-align: center;">  (B)         </div> </div> <div style="display: flex; justify-content: space-around; margin-top: 20px;"> <div style="text-align: center;">  (C)         </div> <div style="text-align: center;">  (D)         </div> </div>	<p>5.</p> <div style="display: flex; justify-content: space-around;"> <div style="text-align: center;">  (A)         </div> <div style="text-align: center;">  (B)         </div> </div> <div style="display: flex; justify-content: space-around; margin-top: 20px;"> <div style="text-align: center;">  (C)         </div> <div style="text-align: center;">  (D)         </div> </div>	<p>6.</p> <div style="display: flex; justify-content: space-around;"> <div style="text-align: center;">  (A)         </div> <div style="text-align: center;">  (B)         </div> </div> <div style="display: flex; justify-content: space-around; margin-top: 20px;"> <div style="text-align: center;">  (C)         </div> <div style="text-align: center;">  (D)         </div> </div>

**B Write.**

is under on are in


/ 12



- |  |  |
|--|--|
| <p>1. Where _____ the lion?<br/>The lion _____ the rock.</p>   | <p>2. Where _____ the elephants?<br/>The elephants _____ the lake.</p> |
| <p>3. Where _____ the zebra?<br/>The zebra _____ the tree.</p> | <p>4. Where _____ the monkeys?<br/>The monkeys _____ the tree.</p>     |

**C Read and write.**

Wait Hurry sorry OK like




1. \_\_\_\_\_ Let's see the snakes.
2. \_\_\_\_\_ I \_\_\_\_\_ monkeys.
3. I'm \_\_\_\_\_
4. That's \_\_\_\_\_

**D Circle.**

1.  (A) swim  
(B) walk  
(C) run  
(D) hop

2.  (A) run  
(B) swim  
(C) walk  
(D) hop

3.  (A) hop  
(B) walk  
(C) run  
(D) swim

4.  (A) walk  
(B) hop  
(C) swim  
(D) run

**E Read and write.**

Yes No can can't they

1. Can snakes hop?

\_\_\_\_\_, \_\_\_\_\_

2. Can bears run?

\_\_\_\_\_, \_\_\_\_\_

3. Can giraffes walk?

\_\_\_\_\_, \_\_\_\_\_

4. Can penguins swim?

\_\_\_\_\_, \_\_\_\_\_